


Fractions

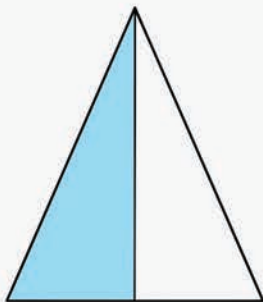
What is the fraction of the shaded parts of the whole?
Circle the correct fraction



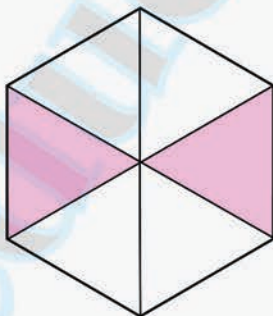
$\frac{2}{5}$ $\frac{3}{5}$



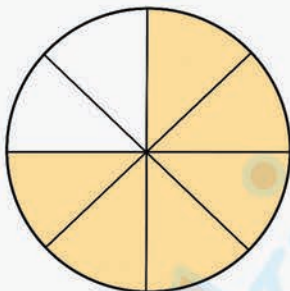
$\frac{3}{3}$ $\frac{1}{3}$



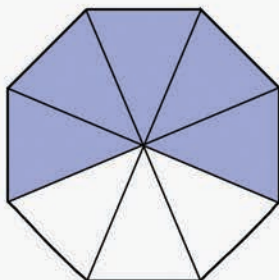
$\frac{1}{4}$ $\frac{1}{2}$



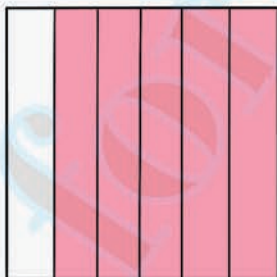
$\frac{2}{6}$ $\frac{4}{6}$



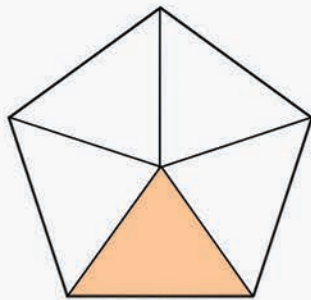
$\frac{2}{8}$ $\frac{6}{8}$



$\frac{5}{8}$ $\frac{5}{6}$



$\frac{5}{5}$ $\frac{5}{6}$



$\frac{1}{5}$ $\frac{1}{6}$