










# Multiplication As Repeated Addition

<p>1 ladybird has 2 spots.</p> 	2	$1 \times 2 = 2$
<p>How many spots do 2 ladybirds have?</p> 	$2 + 2 =$	$2 \times 2 =$
<p>How many spots do 3 ladybirds have?</p> 	$2 + 2 + 2 =$	
<p>How many spots do 4 ladybirds have?</p> 	$\_ + \_ + \_ + \_ =$	$4 \times 2 =$
<p>How many spots do 5 ladybirds have?</p> 		$5 \times 2 =$
<p>1 flower has 5 petals.</p> 	5	
<p>How many petals do 2 flowers have?</p> 	$5 + 5 =$	$2 \times 5 =$
<p>How many petals do 3 flowers have?</p> 	$\_ + \_ + \_ = \_$	$3 \times 5 =$
<p>How many petals do 4 flowers have?</p> 		$4 \times 5 =$
<p>How many petals do 5 flowers have?</p> 