











# Multiplication As Repeated Addition

1 ladybird has 2 spots. 	2	$1 \times 2 = 2$
How many spots do 2 ladybirds have? 	$2 + 2 =$	$2 \times 2 =$
How many spots do 3 ladybirds have? 	$2 + 2 + 2 =$	$3 \times 2 =$
How many spots do 4 ladybirds have? 	$2 + 2 + 2 + 2 =$	$4 \times 2 =$
How many spots do 5 ladybirds have? 	$2 + 2 + 2 + 2 + 2 =$	$5 \times 2 =$
1 flower has 5 petals. 	5	$1 \times 5 =$
How many petals do 2 flowers have? 	$5 + 5 =$	$2 \times 5 =$
How many petals do 3 flowers have? 	$5 + 5 + 5 =$	$3 \times 5 =$
How many petals do 4 flowers have? 	$5 + 5 + 5 + 5 =$	$4 \times 5 =$
How many petals do 5 flowers have? 	$5 + 5 + 5 + 5 + 5 =$	$5 \times 5 =$